

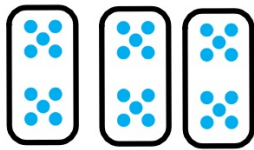


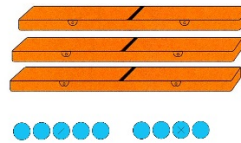
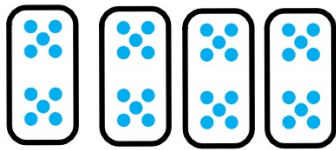


Qui a le plus grand nombre ?
Quelle est la différence ?



Qui a le plus grand nombre ?
Quelle est la différence ?



Qui a le plus grand nombre ?
Quelle est la différence ?

